



## Examples of the Law


Look at the illustrations below. Decide which of Newton's 3 laws of motion is illustrated in each example. Then explain how the situation shows the law.




1. \_\_\_\_\_  
\_\_\_\_\_  
\_\_\_\_\_




2. \_\_\_\_\_  
\_\_\_\_\_  
\_\_\_\_\_




3. \_\_\_\_\_  
\_\_\_\_\_  
\_\_\_\_\_



4. \_\_\_\_\_  
\_\_\_\_\_  
\_\_\_\_\_



5. \_\_\_\_\_  
\_\_\_\_\_



6. \_\_\_\_\_  
\_\_\_\_\_